

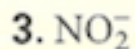
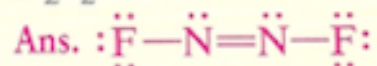
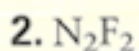
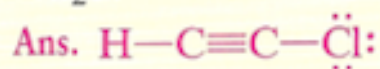
Answers to problems in page 205

Answers to Practice Problems C



Homework — GENERAL

Additional Practice Draw Lewis structures for the following molecules.



Ans.

