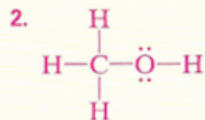
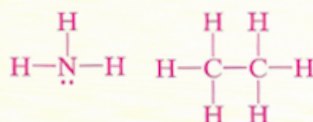
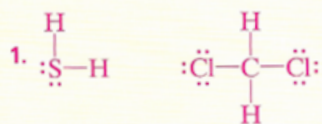


Answers to problems in page 202

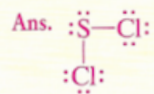
Answers to Practice Problems A



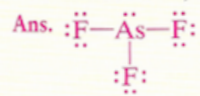
Homework GENERAL

Additional Practice Draw Lewis structures for each compound:

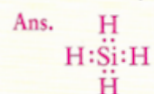
1. sulfur dichloride, SCl_2



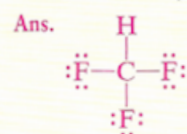
2. arsenic trifluoride, AsF_3



3. silicon tetrahydride, SiH_4



4. trifluoromethane, CHF_3



 Visual